

MONDAY

Patterning and Algebra

1. What is the missing number?

$$\underline{\quad} - 4 = 6$$

2. What is the next number if the pattern rule is **add 3**?

4, $\underline{\quad}$

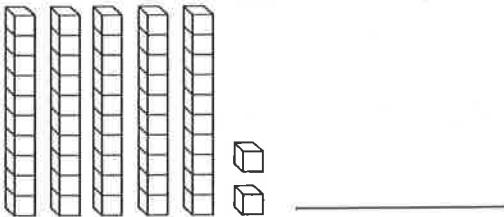
3. Colour an ABC pattern.



TUESDAY

Number Sense

1. What is the number?



2. List the numbers from **greatest to least**.

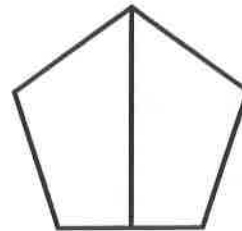
73, 21, 17

$\underline{\quad}$, $\underline{\quad}$, $\underline{\quad}$

3. Write the numeral.

eleven $\underline{\quad}$


4. Colour $\frac{1}{2}$ of the shape.



WEDNESDAY

Geometry and Spatial Sense

1. Colour the figures that are the **same size and shape**.



2. Draw a **hexagon**.

3. What shape is **above** the **square**?




A. triangle

B. square

THURSDAY

Measurement

1. Write the time in two ways.



_____ : _____

quarter past _____

2. What month of the year comes just before June?

A. March B. July C. May

3. Is the temperature **hot** or **cold**?



A. hot

B. cold

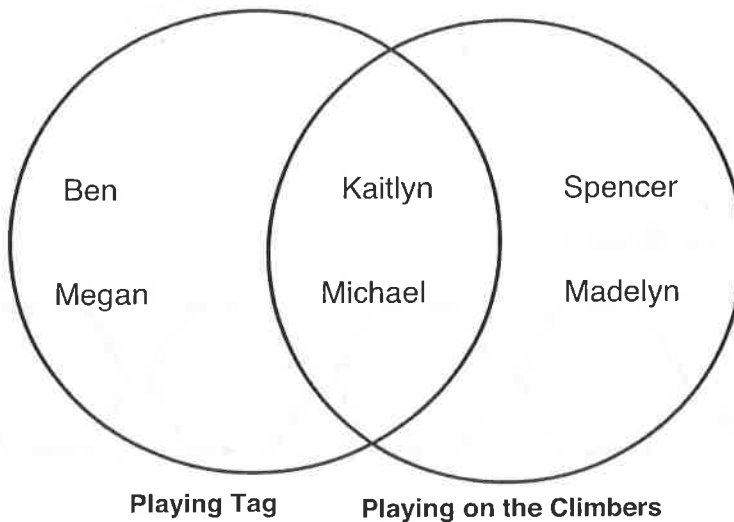
4. Measure the length of the line.



It is about _____  long.

Use the Venn Diagram to answer the questions about these students' favourite recess activities.

Favourite Recess Activities



1. Which students like to play tag, but not play on the climbers?

2. Which students like to play on the climbers, but not play tag?

3. Which students like to do both activities?

BRAIN STRETCH



1.
$$\begin{array}{r} 45 \\ + 39 \\ \hline \end{array}$$

2.
$$\begin{array}{r} 61 \\ + 29 \\ \hline \end{array}$$

3.
$$\begin{array}{r} 70 \\ - 44 \\ \hline \end{array}$$

4.
$$\begin{array}{r} 35 \\ - 19 \\ \hline \end{array}$$