

MONDAY

Patterning and Algebra

1. What is the missing number?

$$\underline{12} - 1 = 11$$

2. What is the next number if the pattern rule is **add 9**?

$$21, \underline{30}$$

3. Make an ABC pattern using



and



.

answers will vary

What is your pattern rule? _____

TUESDAY

Number Sense

1. Find the missing sign.

$$31 \text{ (>) } 12$$

A. < B. = C. >

2. List the numbers from **greatest to least**.

44, 55, 66

66, 55, 44

3. How many tens and ones in 94?

tens 9 ones 4

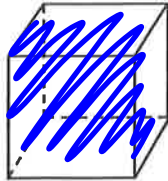
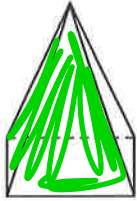
4. Colour $\frac{1}{4}$ of the shape.



WEDNESDAY

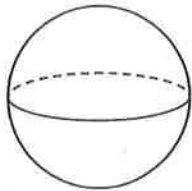
Geometry and Spatial Sense

1. Colour the **cylinder** red.
Colour the **cube** blue.



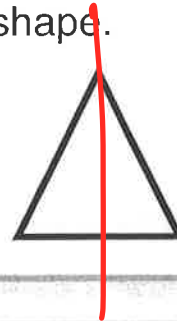
- Colour the **pyramid** green.
Colour the **sphere** orange.

2. What is the name of this 3D figure?



- A. sphere
 B. cone

3. Draw a line of symmetry on the shape.



THURSDAY

Measurement

1. Write the time in two ways.



5 : 15

quarter past 5

2. Circle the best measurement tool to measure a liquid.



A.



B.



3. What is the better estimate of the length of a bug?

A. 2 metres

B. 2 centimetres

4. Measure the length of the line.



It is about 1  long.

FRIDAY

Data Management

Use the calendar to answer the questions.

July

| Sunday | Monday | Tuesday | Wednesday | Thursday | Friday | Saturday |
|--------|--------|---------|-----------|----------|--------|----------|
| | | 1 | 2 | 3 | 4 | 5 |
| 6 | 7 | 8 | 9 | 10 | 11 | 12 |
| 13 | 14 | 15 | 16 | 17 | 18 | 19 |
| 20 | 21 | 22 | 23 | 24 | 25 | 26 |
| 27 | 28 | 29 | 30 | 31 | | |



1. How many days are there in the month of July? 31
2. What day of the week is July 12th? Saturday
3. What day of the week is July 21st? Monday
4. What day of the week does the month end on? Thursday

BRAIN STRETCH



1. Jason needs 25¢ to buy a stamp. If he has 17¢, how much more money does he need?
8¢
2. Lisa has five cats, two dogs and seven birds. How many pets does she have in total?
5 + 2 + 7 = 14 pets