

MONDAY

Patterning and Algebra

1. What is the missing number?

$$7 + \underline{\quad} = 17$$

2. What is the next number if the pattern rule is **add 5**?

20,

3. Make an ABC pattern using



What is your pattern rule? _____

TUESDAY

Number Sense

1. Find the missing sign.

$$33 \bigcirc 33$$

A. < B. = C. >

2. List the numbers from **least to greatest**.


44, 14, 29

_____, _____, _____

3. How many tens and ones in 38?

tens _____ ones _____

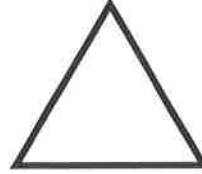
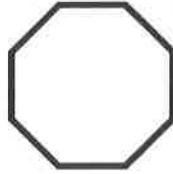
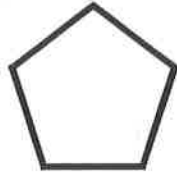
4. Circle $\frac{1}{2}$ of the group.



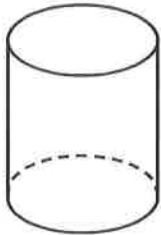
WEDNESDAY

Geometry and Spatial Sense

1. Colour the shapes with **less than 8 corners** green.

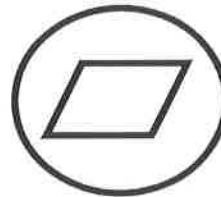


2. Can this 3D figure roll?



- A. yes
- B. no

3. What shape is **outside** the **parallelogram**?




- A. pentagon
- B. circle

THURSDAY

Measurement

1. What time will it be **1 hour later**?




_____ : _____

2. Measure the length of the line.




It is about _____  long.

3. What is the **perimeter**?



_____ units

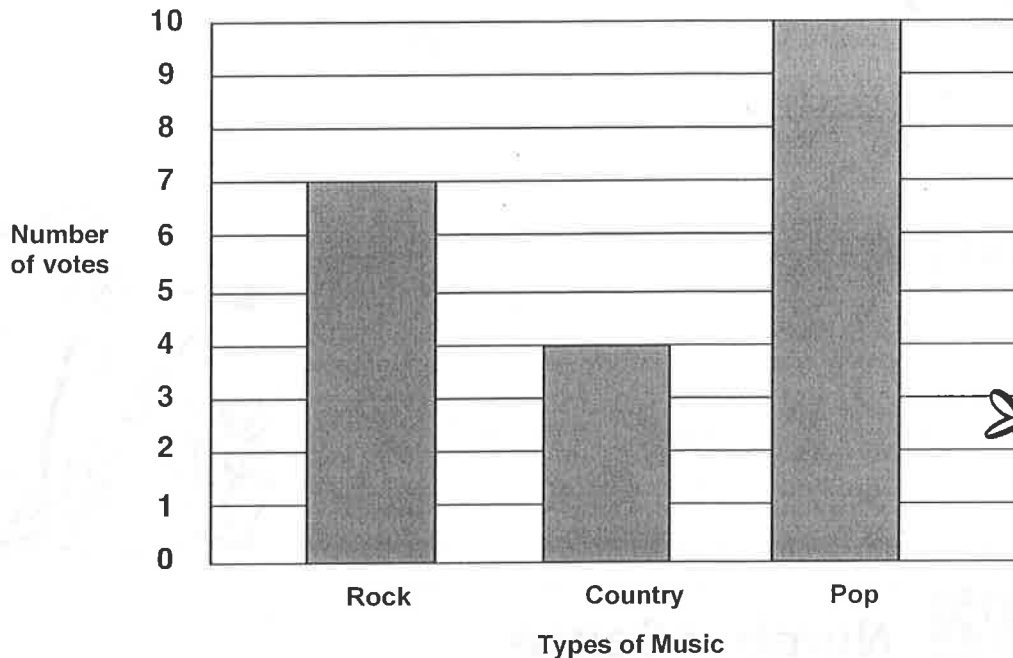
4. What is the **area**?



_____ square units

Here are the results of a Favourite Music Survey.
Answer the questions using the information from the bar graph.

Favourite Music Graph



1. Which music was the **most** popular? _____
2. Which music was the **least** popular? _____
3. Order the types of music from the most number of votes to the least.

BRAIN STRETCH



Alexander had 67 hockey cards. He gave 19 cards to Rob. How many hockey cards does Alexander have left?