

MONDAY

Patterning and Algebra

1. What is the missing number?
2. What is the next number if the pattern rule is **subtract 2**?

$$\underline{\quad} - 6 = 5$$

13,

3. Count forward by 10's.

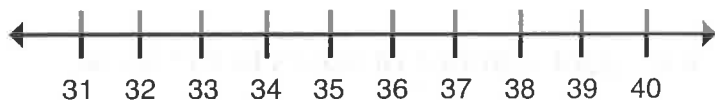
40, 50, , , , ,



TUESDAY

Number Sense

1. Use the number line to choose the number that completes the sentence.
2. List the numbers from **greatest to least**.




85, 7, 90

36 is two more than .

 , ,

3. How many tens and ones in 29?
4. Circle the **fourth** unicorn.

tens ones



WEDNESDAY

Geometry and Spatial Sense

1. Colour the **octagons** red.

Colour the **trapezoid** green.

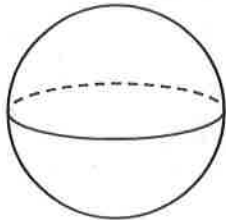
Colour the **pentagons** yellow.

Colour the **rectangles** red.

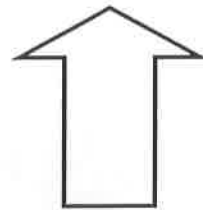


2. Can this 3D figure roll?

3. Draw a line of symmetry on the shape.



- A. yes
- B. no




THURSDAY

Measurement

1. What time was it
1 hour before?

2. What month is just after
September?




_____ : _____


- A. December
- B. October
- C. April

3. What is the **perimeter**?

4. What is the **area**?



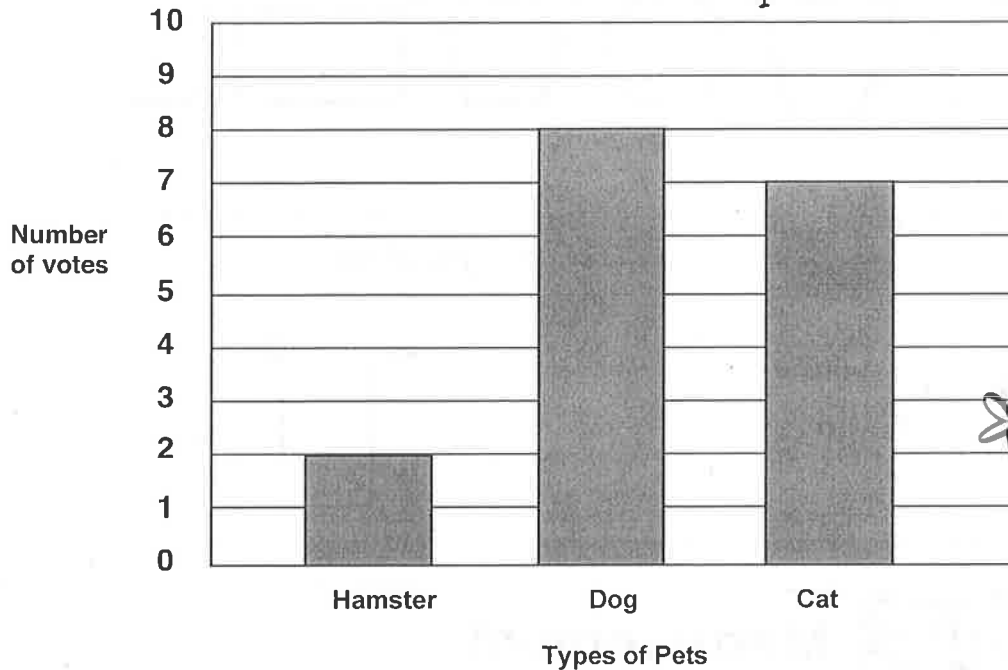
_____ units



_____ square units

Here are the results of a Favourite Pet survey.
Answer the questions using the information from the bar graph.

Favourite Pet Graph



1. Which pet was the **most** popular? _____
2. Which pet was the **least** popular? _____
3. How many students voted for either a hamster or cat? _____

BRAIN STRETCH



Carolyn baked 24 chocolate chip cookies and 36 oatmeal raisin cookies.
How many cookies did Carolyn bake in all?