

MONDAY

Patterning and Algebra

1. What is the missing number?
2. What is the next number if the pattern rule is **subtract 2**?

$$\underline{11} - 6 = 5$$

$$13, \underline{11}$$

3. Count forward by 10's.

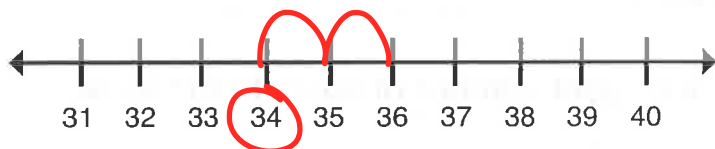
40, 50, 60, 70, 80, 90, 100



TUESDAY

Number Sense

1. Use the number line to choose the number that completes the sentence.
2. List the numbers from **greatest to least**.




36 is two more than 34.

85, 7, 90

90, 85, 7

3. How many tens and ones in 29?
4. Circle the **fourth** unicorn.

tens 2 ones 9



WEDNESDAY

Geometry and Spatial Sense

1. Colour the **octagons** red.

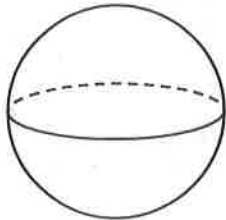
Colour the **trapezoid** green.

Colour the **pentagons** yellow.

Colour the **rectangles** red.

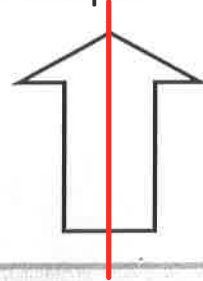


2. Can this 3D figure roll?



- A. yes
 B. no


3. Draw a line of symmetry on the shape.



THURSDAY

Measurement

1. What time was it
1 hour before?




10 : 30

2. What month is just after
September?


- A. December
 B. October
C. April

3. What is the **perimeter**?



14 units


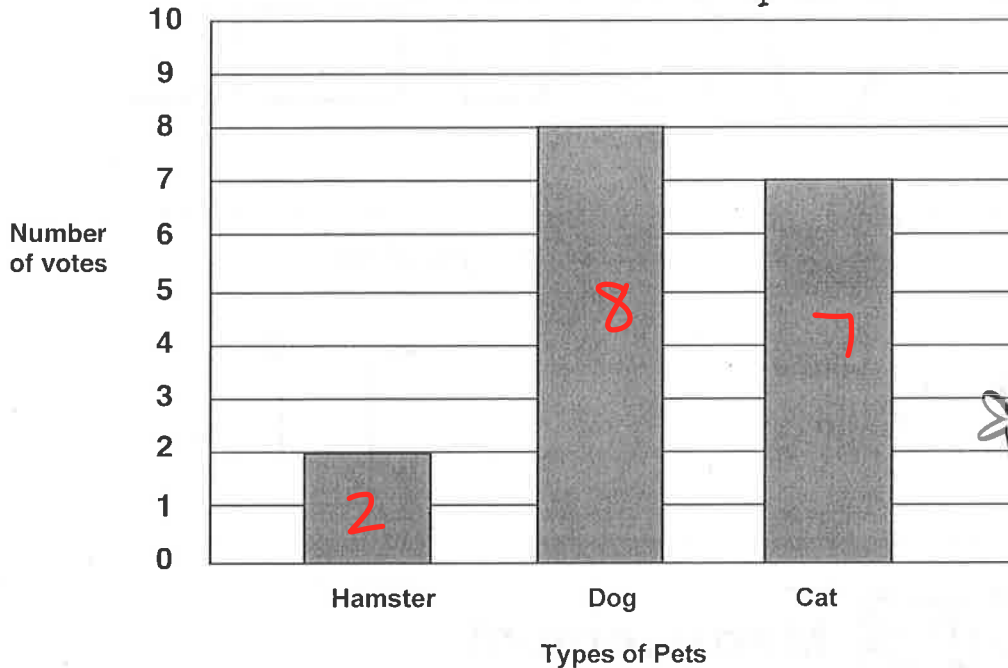
4. What is the **area**?



8 square units

Here are the results of a Favourite Pet survey.
Answer the questions using the information from the bar graph.

Favourite Pet Graph



- Which pet was the **most** popular? Dog
- Which pet was the **least** popular? Hamster
- How many students voted for either a hamster or cat? 7+2=9

BRAIN STRETCH



Carolyn baked 24 chocolate chip cookies and 36 oatmeal raisin cookies.
How many cookies did Carolyn bake in all?

$$\begin{array}{r} 24 \\ + 36 \\ \hline 60 \text{ cookies} \end{array}$$