

MONDAY

Patterning and Algebra

1. $45 \times \underline{\quad} = 90$

2. $60 - 5 = \underline{\quad}$




What kind of pattern is this?

4. What will be the 20th figure?



5. Extend the pattern:

1 1 2 2 3 3 4 4 1 1 2 2 3 _____, _____, _____, _____



TUESDAY

Number Sense

1. Write a fraction equivalent to $\frac{1}{2}$.

2. Write a fraction equivalent to $\frac{3}{4}$.

3. Which fraction is larger?

$\frac{1}{4}$ $\frac{2}{3}$

4. Which fraction is larger?

$\frac{3}{4}$ $\frac{1}{2}$

5. Which fraction is larger?

$\frac{3}{5}$ $\frac{1}{2}$

WEDNESDAY

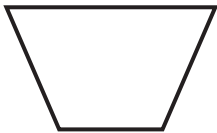
Geometry and Spatial Sense

1. A trapezoid has one pair of parallel sides.

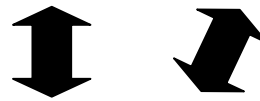
true or false

2. Draw a straight angle.

3. How many right angles does a trapezoid have?



4. Are these shapes congruent or similar?



5. How many faces does a cylinder have?

THURSDAY

Measurement


1. Draw a rectangle that has a side 2 cm long.

2. Sunita can walk to school in 18 minutes. If she leaves at 8:10 am, when will she arrive at school?

3. Find the area of a square that has 3 cm sides.

4. 20 dm = ___ cm

5. How many years in a century? In a millennium?



Use the calendar to answer the questions.

June

Sunday	Monday	Tuesday	Wednesday	Thursday	Friday	Saturday
				1	2	3
4	5	6	7	8	9	10
11	12	13	14	15	16	17
18	19	20	21	22	23	24
25	26	27	28	29	30	

1. How many Saturdays are in the month of June? _____
2. What day of the week is June 9th? _____
3. Name the date that is 2 weeks after June 13th. _____
4. What is the date on the third Sunday in June? _____
5. What day of the week does the month end on? _____

BRAIN STRETCH



The Lemington Lions basketball team had a great season. They scored 26 points during their first game, 22 points during their second game, 33 points during their third game, 40 points during their fourth game and 34 points during their last game.

1. How many points did they score all season?
2. What is the range of their points scored?

